

ForFun
School




SUMMER 1

www.forfunschool.com


SUMMER 1



ICE CREAM




WATERMELON



FLOWER



SUN HAT




MOSQUITO

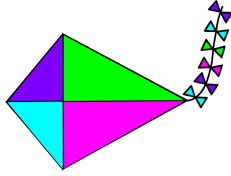
SUMMER 1



CRAB



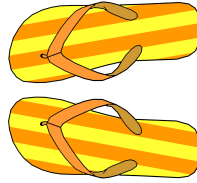
FISH



KITE



SWIMSUIT




FLIP FLOP


COLOR AND CUT YOUR FLASHCARDS

FLASHCARDS


SUMMER



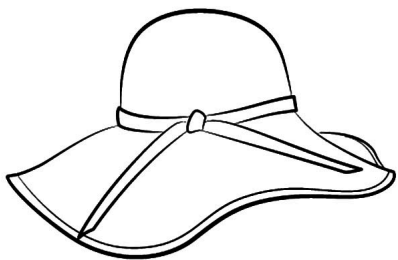
Ice cream



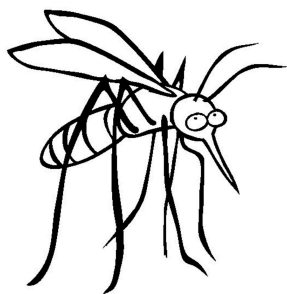
Watermelon




Flower




Sun hat



Mosquito




Crab

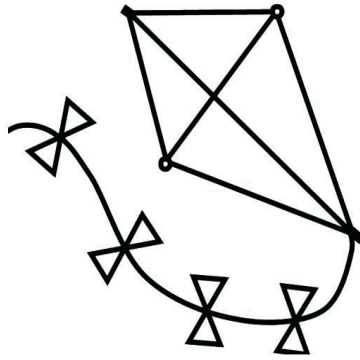


Fish

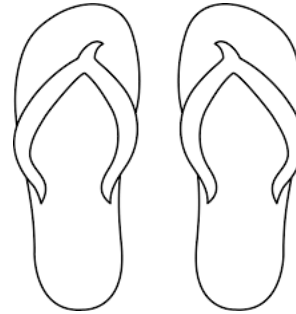
COLOR AND CUT YOUR FLASHCARDS




Swimsuit




Kite




Flip Flop



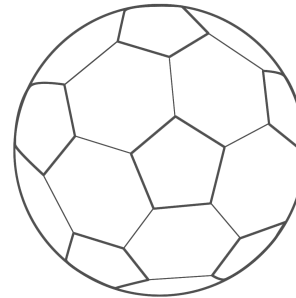
Tree




Bike



Sun




Ball




Bird

Summer Count and Graph Questions

SUMMER 1



7				
6				
5				
4				
3				
2				
1				



1. How many of each summer picture did you count?


_____ sun _____ ball
 _____ bike _____ tree

2. How many balls and bikes did you count altogether?


3. How many more suns than trees did you count?

4. How many suns, trees, and bikes were there altogether?

Summer Count and Graph Questions



7	✕			
6			✕	
5		✕		
4				✕
3				
2				
1				



1. How many of each summer picture did you count?

5 sun 6 ball
4 bike 7 tree

2. How many balls and bikes did you count altogether?

3. How many more suns than trees did you count?

4. How many suns, trees, and bikes were there altogether?

Summer Multiplication

Draw 4 trees. Draw 3 birds in each tree. How many birds are there altogether? Write this as a multiplication.



$$\underline{\hspace{1cm}} \times \underline{\hspace{1cm}} = \underline{\hspace{1cm}}$$

Draw 4 bags. In each bag, draw 6 bottles of water. How many bottles of water are there? Write this as a multiplication.



$$\underline{\hspace{1cm}} \times \underline{\hspace{1cm}} = \underline{\hspace{1cm}}$$

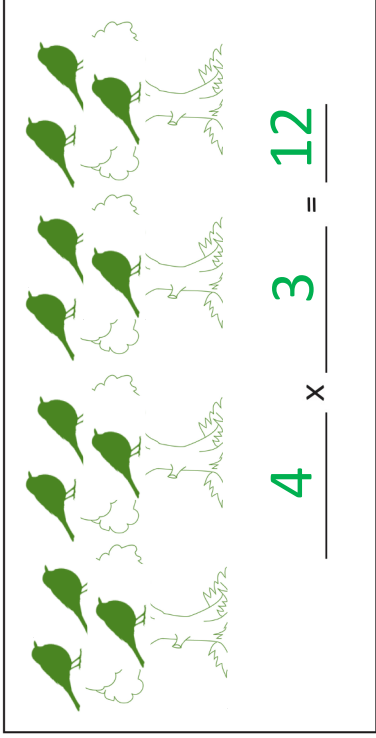
Draw 6 ice cream cones. Put 10 sprinkles on each ice cream. How many sprinkles are there in all? Write this as a multiplication.



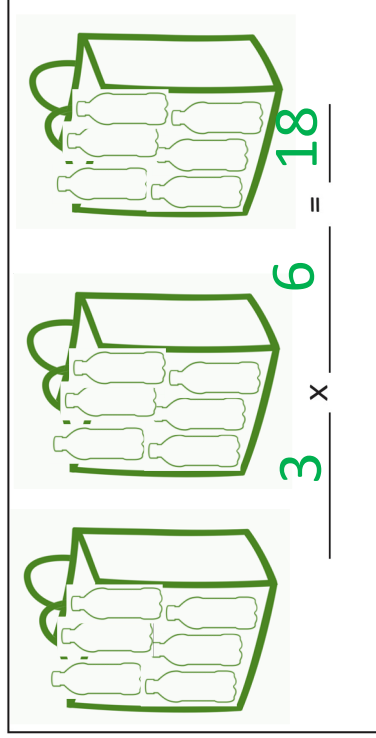
$$\underline{\hspace{1cm}} \times \underline{\hspace{1cm}} = \underline{\hspace{1cm}}$$

Summer Multiplication

Draw 4 trees. Draw 3 birds in each tree. How many birds are there altogether? Write this as a multiplication.



Draw 4 bags. In each bag, draw 6 bottles of water. How many bottles of water are there? Write this as a multiplication.



Draw 6 ice cream cones. Put 10 sprinkles on each ice cream. How many sprinkles are there in all? Write this as a multiplication.

